

Use Equal Groups to Show Division: Write an Equation #3

Write a division equation to represent each of the following models.

1.



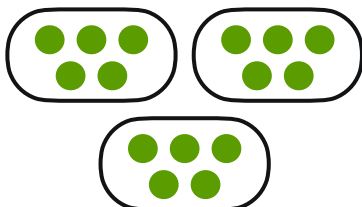
2.




Equation: _____

Equation: _____

3.



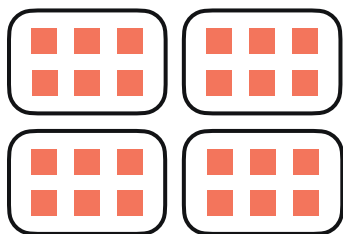
4.




Equation: _____

Equation: _____

5.



6.




Equation: _____

Equation: _____

7.



8.



Equation: _____

Equation: _____